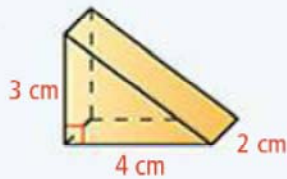


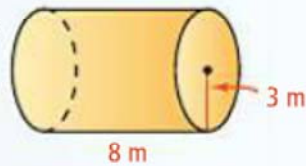
HW: Final Review #2 and p.752-753:11-13,16,17,21-24

Find the surface area of each figure. Leave your answers in terms of  $\pi$  where applicable.

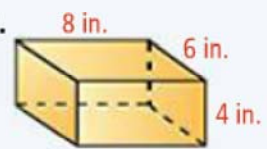
11.



12.

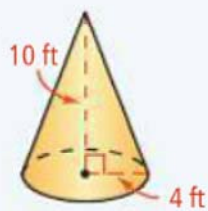


13.

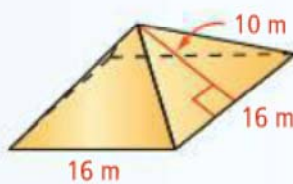


Find the surface area of each figure. Round your answers to the nearest tenth.

16.



17.

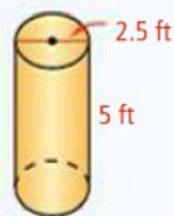


Find the volume of each figure. If necessary, round to the nearest tenth.

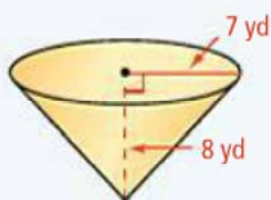
21.



22.



23.



24.

